




KARTA PRACY

Policz, ile boków ma każda figura. Odpowiedź zapisz w kratkach.



koło



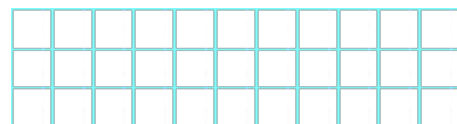
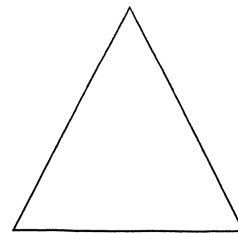
kwadrat



prostokąt



trójkąt



Pokoloruj koło na kolor żółty, kwadrat na czerwony, prostokąt na niebieski i trójkąt na zielony.